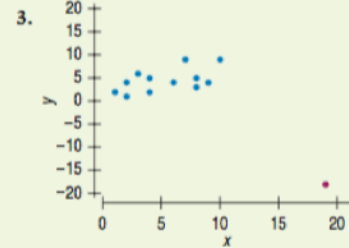
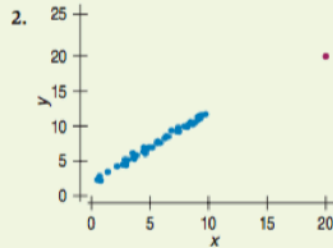
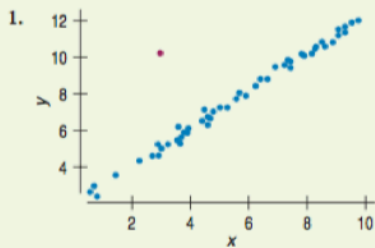


Chapter 8



Just Checking

Each of these scatterplots shows an unusual point. For each, tell whether the point is a high-leverage point, would have a large residual, or is influential.



11. Skinned knees There is a strong correlation between the temperature and the number of skinned knees on playgrounds. Does this tell us that warm weather causes children to trip?